

# KLE SOCIETY'S SCHOOL, NAGARABHAVI, BENGALURU

NAME : \_\_\_\_\_

GRADE : 1

DATE : \_\_\_\_\_

SUBJECT : MATHEMATICS

TOPIC: MULTIPLICATION

1) Complete the given tables.

2	X	1	=	2




3	X	1	=	3

4	X	1	=	4



2) Group the objects and write the multiplication facts.



$$\square \times \square = \square$$



$$\square \quad \square \quad \square$$



$$\square \quad \square \quad \square$$

