

KLE SOCIETY'S SCHOOL, NAGARBHAVI, BENGALURU

NAME: _____

GRADE: 3

DATE: _____

SUBJECT: MATH




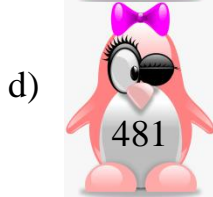
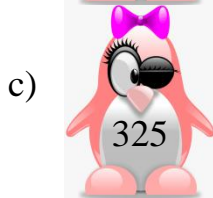
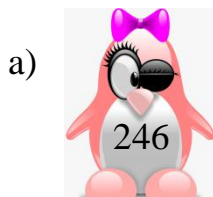
Practice paper

Chapter 2 - Addition and Subtraction

1. Place the digits 1, 2, 3, 4, 5, 6, 7, 8 and 9 in the boxes to make a correct addition. A few numbers have been already given to help you out.

$$\begin{array}{r} \boxed{1} \quad \boxed{} \quad \boxed{9} \\ + \boxed{} \quad \boxed{3} \quad \boxed{} \\ \hline \boxed{5} \quad \boxed{} \quad \boxed{} \\ \hline \end{array}$$

2. Match the following by drawing lines so that the numbers written on them add up to 999.



3. Solve the following problems mentally. Do not use paper and pencil.

a) 13, 23

Ans:

b) 80, 16

Ans:

c) 114, 21

Ans:

d) Start with 16

Add 15

Subtract 6

Ans :

e) Start with 50

Subtract 19

Add 3

Ans:

f) Start with 61

Add 33

Subtract 17

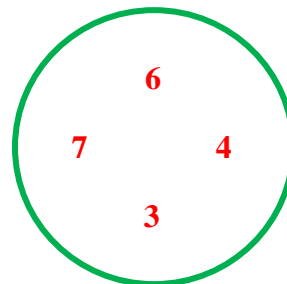
Ans:

4. Using the numbers given in the circle below form any three 4 - digit numbers and write them in the blanks given on the left side of the circle. Also arrange these numbers in ascending and descending order.

1. _____

2. _____

3. _____



Ascending order _____

Descending order _____